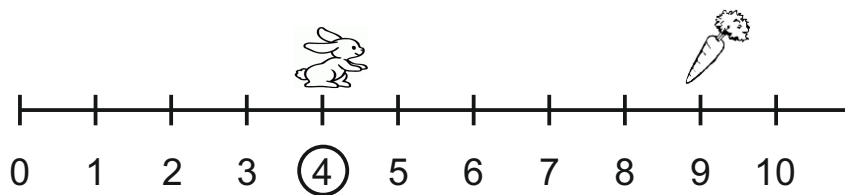


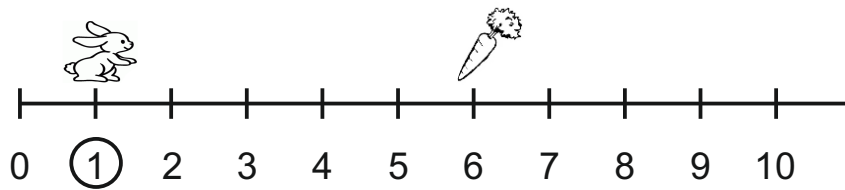
Conta quanti salti deve fare il coniglietto per prendere la carota



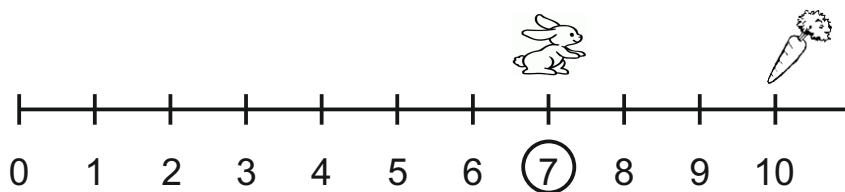
$$\square + \square = \square$$



$$\square + \square = \square$$



$$\square + \square = \square$$



$$\square + \square = \square \square$$