

0 1 2 3 4 5 6 7 8 9

3

10

### Conta e scrivi l'addizione

2

11

1

12

0

13

19

14

18

15

17

16

16

17

15

18

14

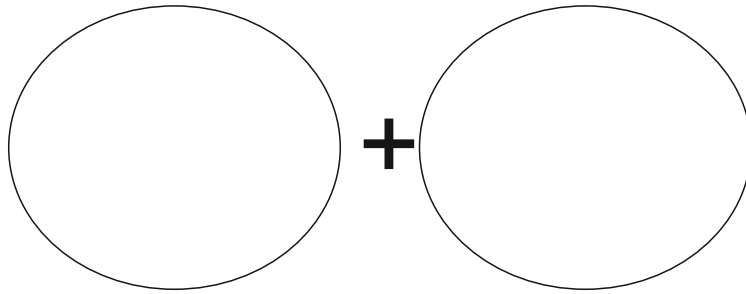
19

13

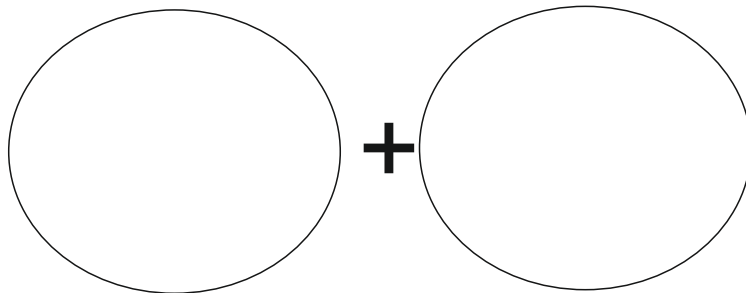
0

12

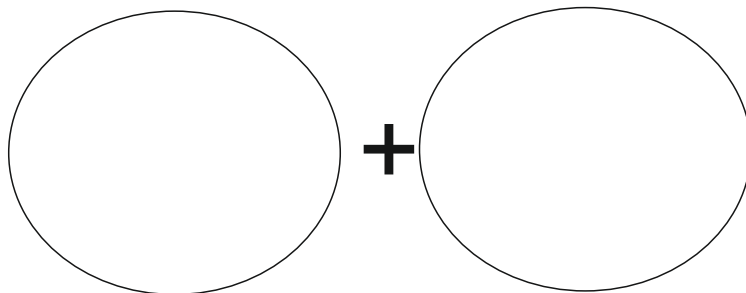
1



$$\square + \square = \square \square$$



$$\square + \square = \square \square$$



$$\square + \square = \square \square$$

11 10 9 8 7 6 5 4 3 2